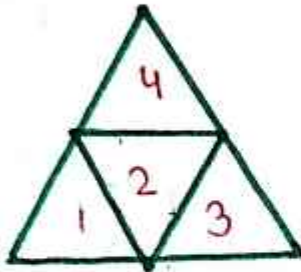


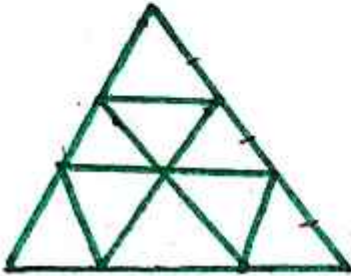
# COUNTING OF FIGURES

1)



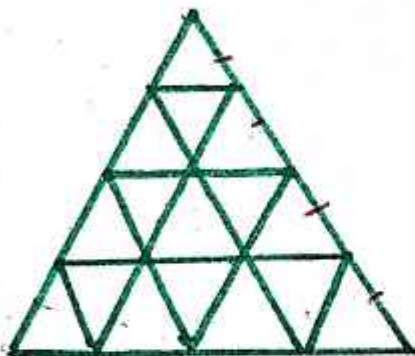
$$\begin{array}{r} 4+1 \\ 5 \end{array}$$

2)



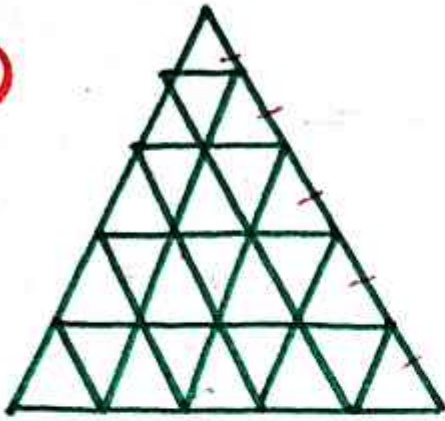
$$\begin{array}{r} 1-1 \\ 2-3 \\ 3-6 \\ \hline 10+3 \\ 13 \end{array}$$

3)



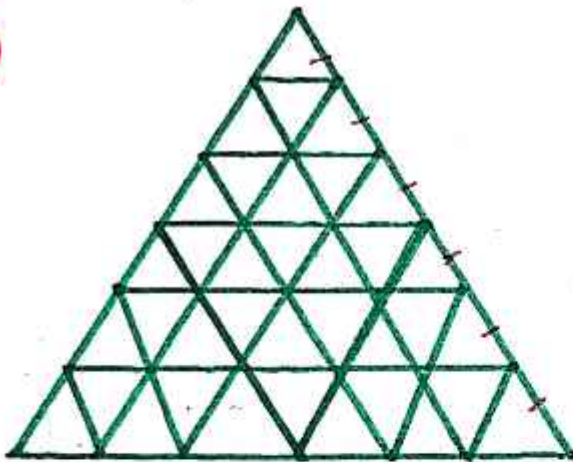
$$\begin{array}{r} 1-1 \\ 2-3 \\ 3-6 \\ 4-10 \\ \hline 20+7 \\ 27 \end{array}$$

4)



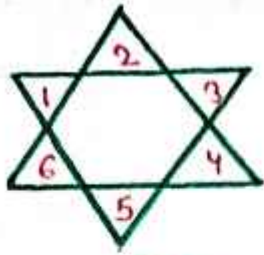
$$\begin{array}{r}
 1 - 1 \times \\
 2 / 3 \checkmark \\
 3 / 6 \times \\
 4 / 10 \checkmark \\
 5 / 15 \times \\
 \hline
 35 + 13 \\
 48
 \end{array}$$

5)



$$\begin{array}{r}
 1 - 1 \checkmark \\
 2 / 3 \times \\
 3 / 6 \checkmark \\
 4 / 10 \times \\
 5 / 15 \checkmark \\
 6 / 21 \times \\
 \hline
 56 + 22 \\
 78
 \end{array}$$

6)



$$6 + 2 = 8$$

7)



10

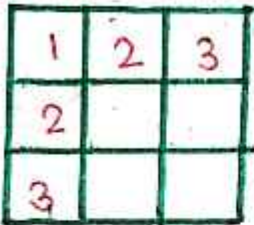
वर्ग की संख्या

8)



5

9)



$$3 \times 3 = 9$$

$$2 \times 2 = 4$$

$$1 \times 1 = 1$$

14

10)



$$4 \times 5 = 20$$

$$3 \times 4 = 12$$

$$2 \times 3 = 06$$

$$1 \times 2 = 02$$

40

11)

1	2	3	4	5
2				
3				
4				
5				
6				

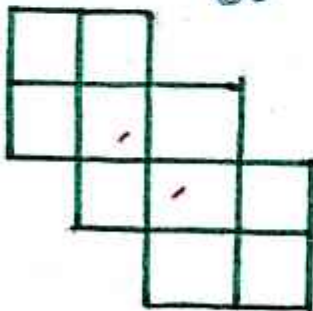
$$\begin{aligned}
 5 \times 6 &= 30 \\
 4 \times 5 &= 20 \\
 3 \times 4 &= 12 \\
 2 \times 3 &= 06 \\
 1 \times 2 &= \underline{02} \\
 &70
 \end{aligned}$$

12)

1	2	3	4
	<input type="checkbox"/>		
2		<input type="checkbox"/>	
3	<input type="checkbox"/>		<input type="checkbox"/>
4		<input type="checkbox"/>	
5			

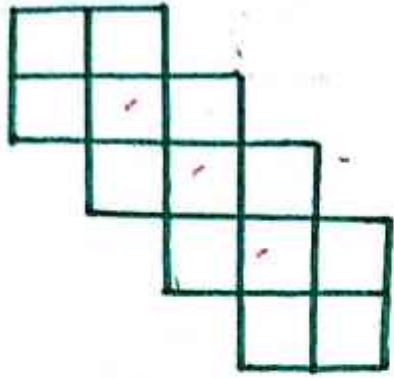
$$\begin{aligned}
 4 \times 5 &= 20 \\
 3 \times 4 &= 12 \\
 2 \times 3 &= 06 \\
 1 \times 2 &= \underline{02} \\
 &40 + 20 \\
 &60
 \end{aligned}$$

13)



$$\begin{aligned}
 15 - 2 \\
 13
 \end{aligned}$$

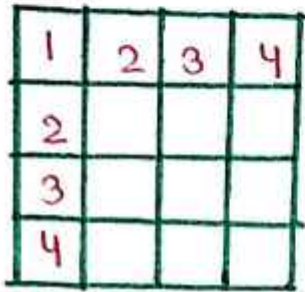
14)



$$20 - 3$$

$$17$$

15)




$$\begin{array}{r} 10 \\ 10 \\ \hline 100 \end{array}$$

$$\begin{array}{r} 4 \times 4 = 16 \\ 3 \times 3 = 09 \\ 2 \times 2 = 04 \\ 1 \times 1 = 01 \\ \hline 30 \end{array}$$

- आयत कितने हैं - 100
- वर्ग कितने हैं - 30
- केवल आयत -  $\frac{100 - 30}{70}$

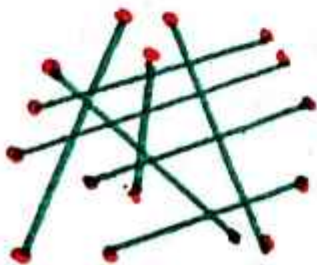
रेखा की संख्या

16)



$$17$$

17)



$$\frac{16}{2} = 8$$